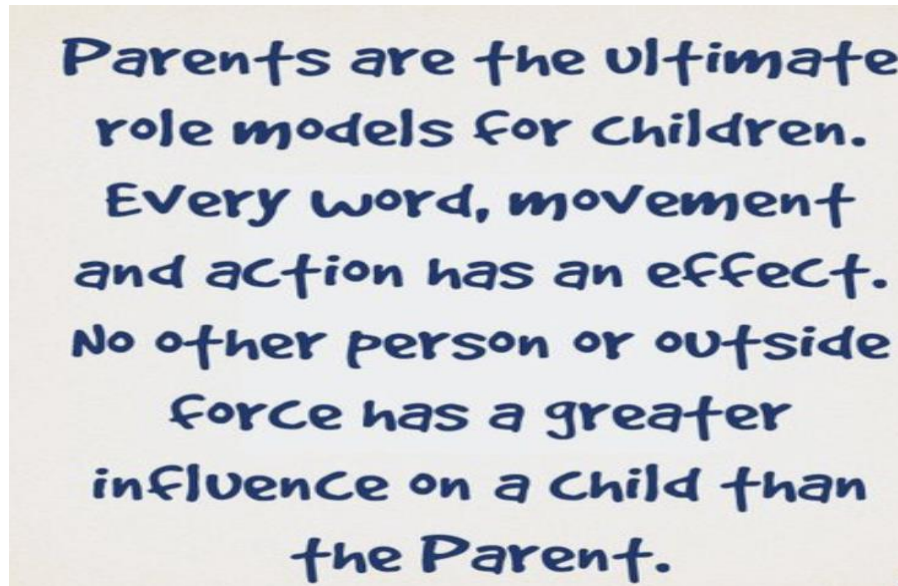


Distance Learning Phase LL Math Worksheets and Task Cards



April 2020

Dear Families,

Please find all the worksheet and task cards needed for you child in this packet.

The worksheet and task cards will be marked with the corresponding day number listed on the packet.

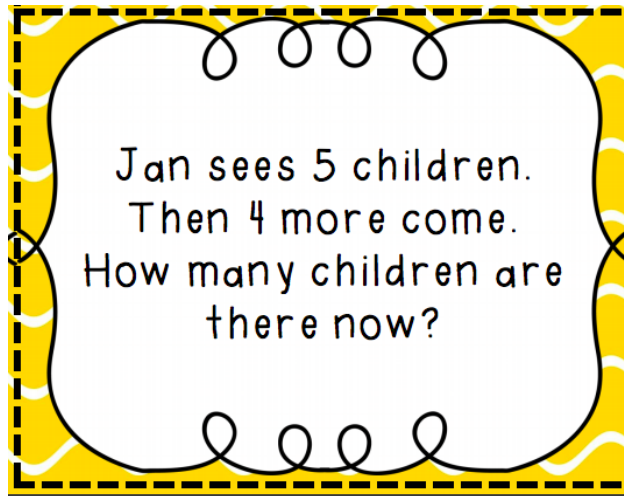
If you have any questions please contact me at _____ .

Please stay safe and healthy and know that your precious child and I truly appreciate all of your support.

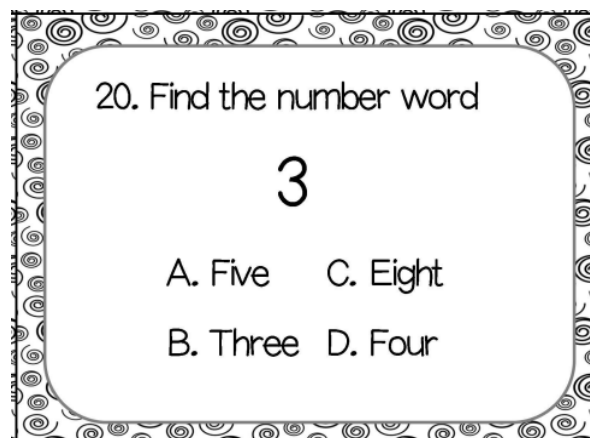
Kindly,

Your Child's Teacher

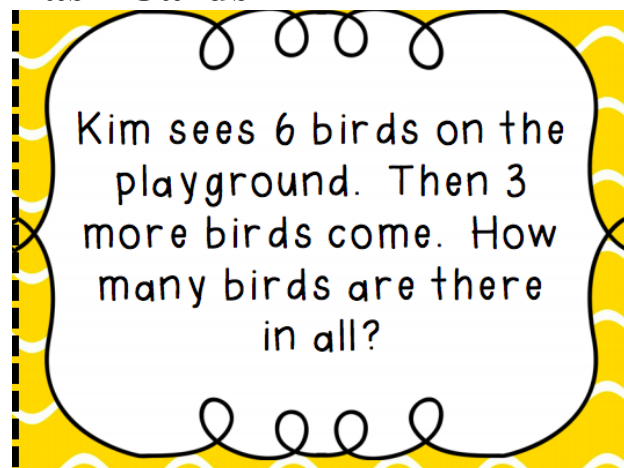
Day 16-Enrichment Task Cards



Day 17- Enrichment Task Cards

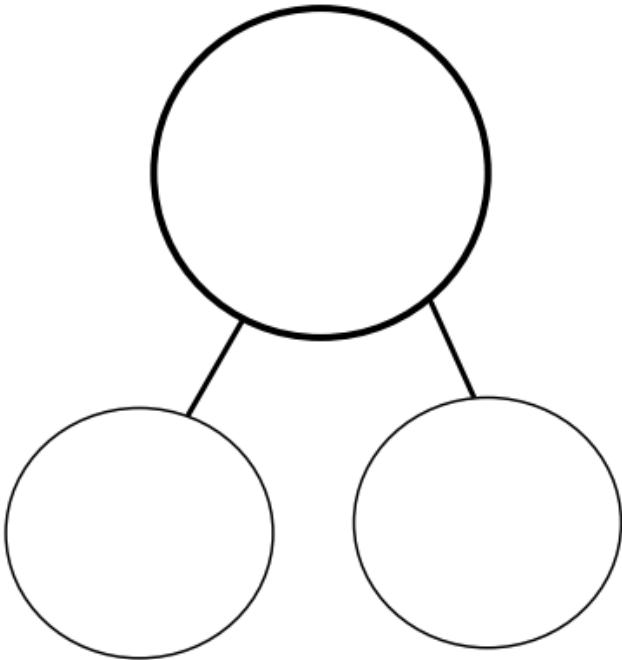


Day 18 Enrichment Task Cards



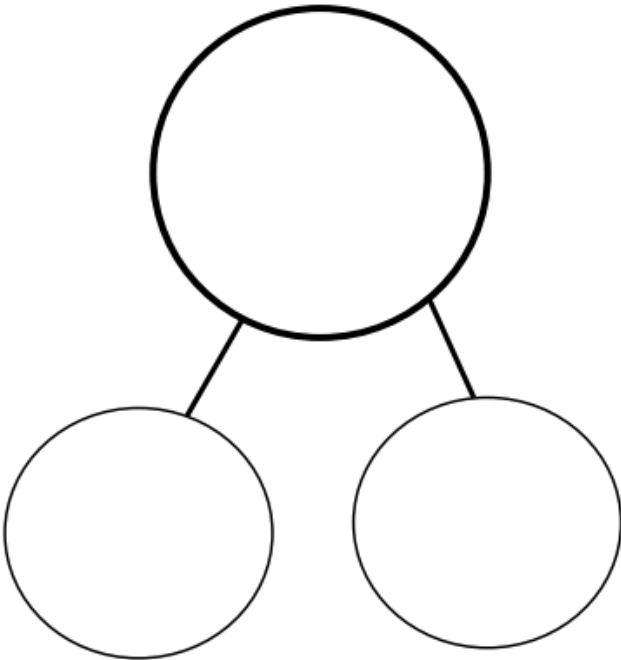
Day 18 Worksheet Addition Number Bond

Addition Number Bonds



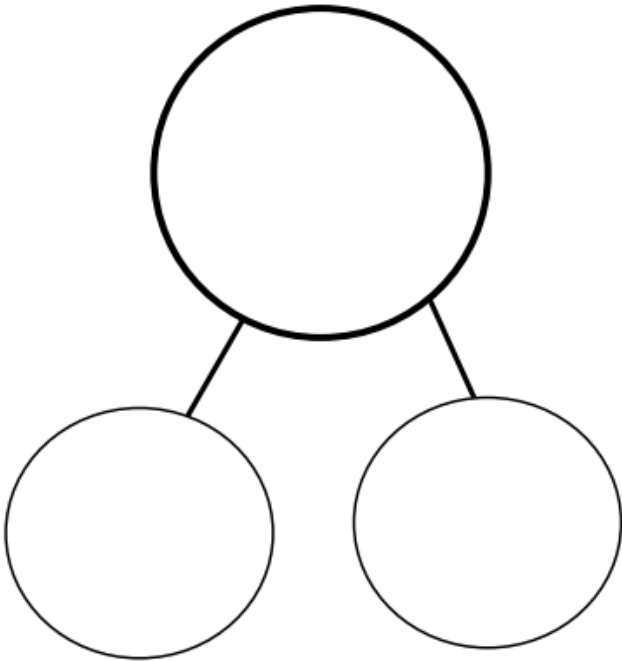
_____ + _____ = _____

Addition Number Bonds



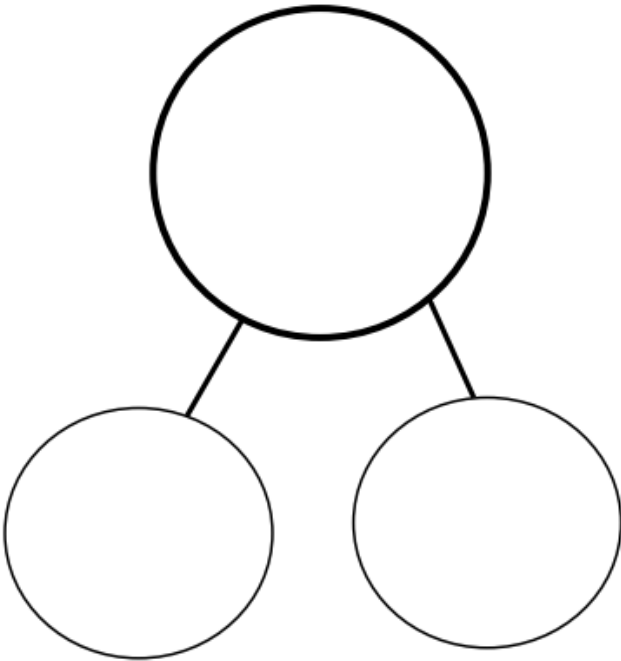
_____ + _____ = _____

Addition Number Bonds



_____ + _____ = _____

Addition Number Bonds



_____ + _____ = _____

Day 19 Worksheet

Name _____ Date _____ Score _____

Writing Numbers 0-20

<hr/> <hr/> <hr/>	<hr/> <hr/> <hr/>	<hr/> <hr/> <hr/>
<hr/> <hr/> <hr/>	<hr/> <hr/> <hr/>	<hr/> <hr/> <hr/>
<hr/> <hr/> <hr/>	<hr/> <hr/> <hr/>	<hr/> <hr/> <hr/>
<hr/> <hr/> <hr/>	<hr/> <hr/> <hr/>	<hr/> <hr/> <hr/>

Day 19 Worksheet

Name _____ Date _____ Score _____

Writing Numbers 1-50

<hr/> <hr/> <hr/>	<hr/> <hr/> <hr/>	<hr/> <hr/> <hr/>	<hr/> <hr/> <hr/>
<hr/> <hr/> <hr/>	<hr/> <hr/> <hr/>	<hr/> <hr/> <hr/>	<hr/> <hr/> <hr/>
<hr/> <hr/> <hr/>	<hr/> <hr/> <hr/>	<hr/> <hr/> <hr/>	<hr/> <hr/> <hr/>
<hr/> <hr/> <hr/>	<hr/> <hr/> <hr/>	<hr/> <hr/> <hr/>	<hr/> <hr/> <hr/>
<hr/> <hr/> <hr/>	<hr/> <hr/> <hr/>	<hr/> <hr/> <hr/>	<hr/> <hr/> <hr/>
<hr/> <hr/> <hr/>	<hr/> <hr/> <hr/>	<hr/> <hr/> <hr/>	<hr/> <hr/> <hr/>
<hr/> <hr/> <hr/>	<hr/> <hr/> <hr/>	<hr/> <hr/> <hr/>	<hr/> <hr/> <hr/>

Day 19- Enrichment Task Cards

K.O.A.A.2
CORN DOG LOVIN': TAKE A BITE OUT OF WORD PROBLEMS

Marie ordered 10 corn dog nuggets. She ate 6 of them.
How many are left?

Day 20- Enrichment Task Cards

Jen has 8 papers. She gives 3 away. How many are left?

Day 21- Enrichment Task Cards

15. What number will make 10?

10

2 ?

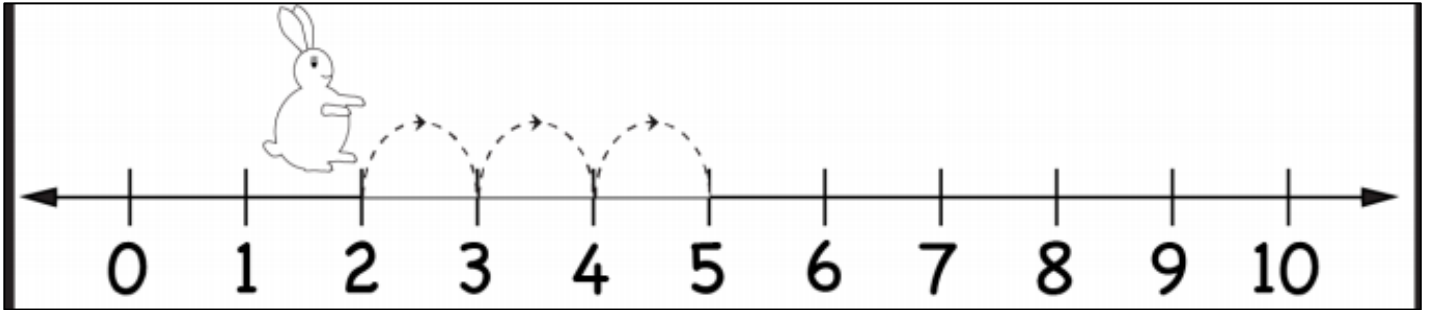
A. 7 C. 3

B. 8 D. 5


© Mrs. Richard 1st Resources 2015

Day 21

Directions: Solve the equation: $2 + 3 =$



Directions: solve this equation: $6 + 2 =$




Day 22 Worksheet

Directions:

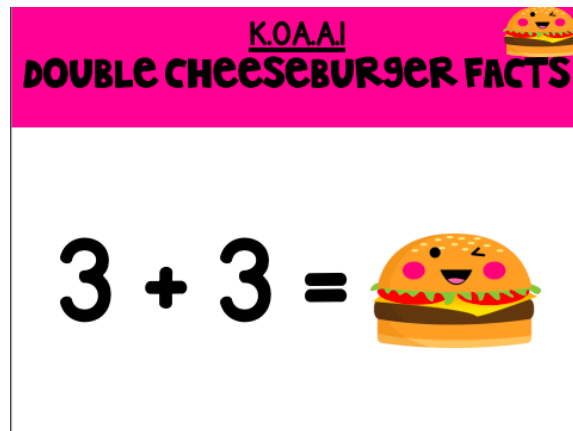
1. Count all the chairs you have in your house. Write the number.
2. Count all the tables you have in your house. Write the number.
3. Add your numbers together and write the equation:

$$\underline{\hspace{2cm}} + \underline{\hspace{2cm}} = \underline{\hspace{2cm}}$$

Day 22- Enrichment Task Cards



Day 23- Enrichment Task Cards




Day 23

Directions: Write the missing numbers

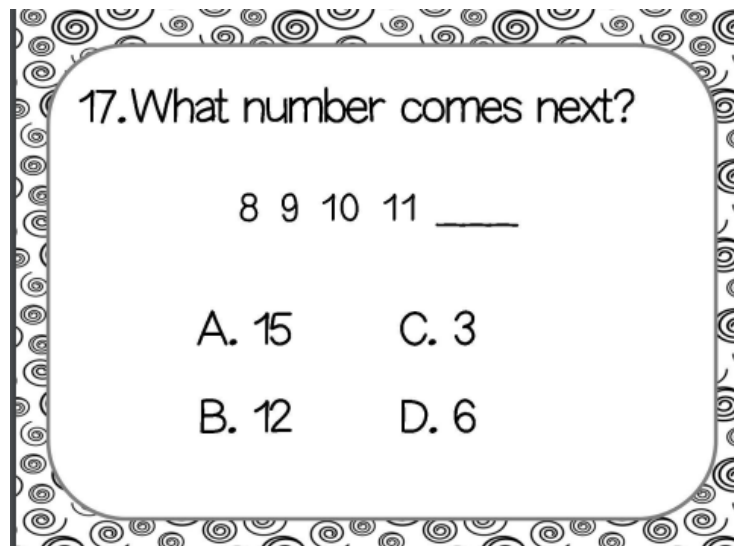
1		3		5
6		8		10
11		13		15

Day 24

Directions: Write the equation: $4 + 2 = \underline{\hspace{2cm}}$ Then solve the equation.



Day 24- Enrichment Task Cards



Day 25

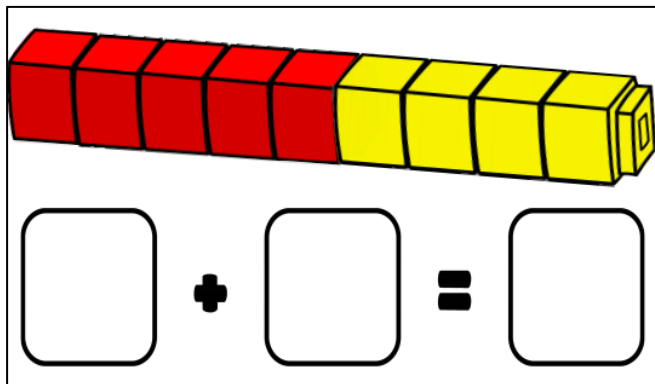
Directions: Write in the missing operation. For addition, write a + sign. For subtraction, write a - Sign

$$3 \square 6 = 9$$

$$5 \square 2 = 3$$

$$6 \square 4 = 2$$

Day 25- Enrichment Task Cards



Day 26

Direction: Write your numbers to 10 in two columns.
Use the number words below to write the correct
number word beside each number.

1	6
2	7
3	8
4	9
5	10

Number Words

one

six

two

seven

three

eight

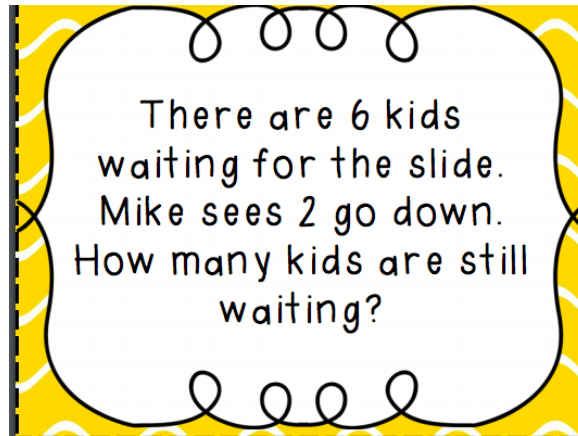
four

nine

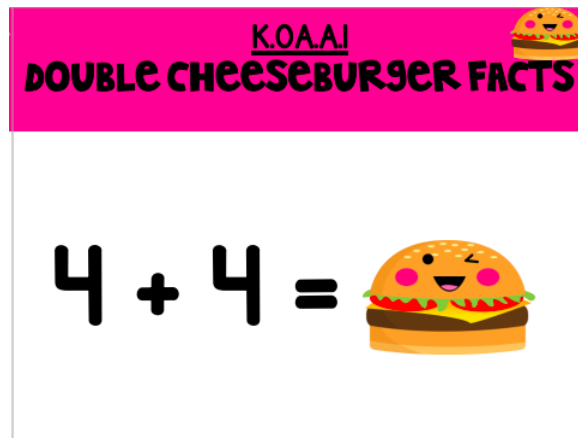
five

ten

Day 26- Enrichment Task Cards



Day 27- Enrichment Task Cards



Day 27

Direction: Write in the missing numbers.

Whole 5			Whole 5	
Part 1	Part		Part 2	Part

$$5 = 1 + \underline{\quad}$$

$$2 + \underline{\quad} = 5$$

Day 28

Direction: Circle the greatest (most) number in each row. Color the smallest number in each row.

7

1

5

3

3

6

4

2

4

3

8

7

5

4

2

3

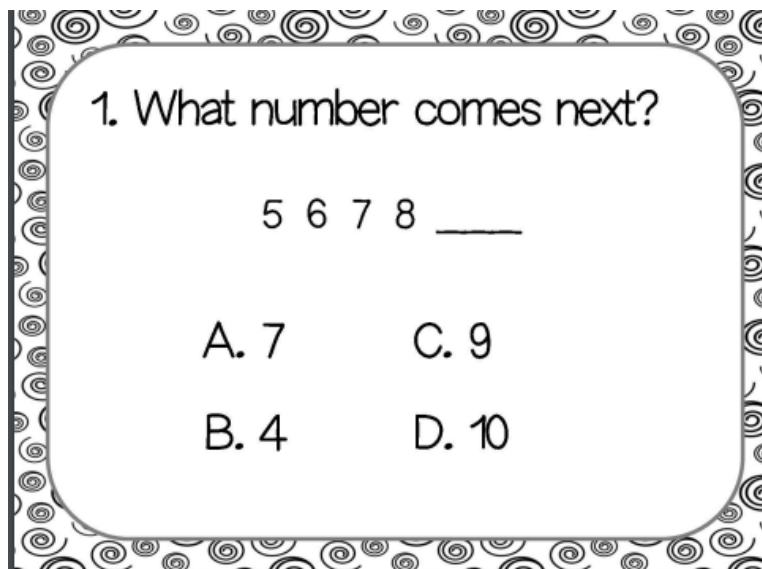
4

2

5



7

Day 28- Enrichment Task Cards

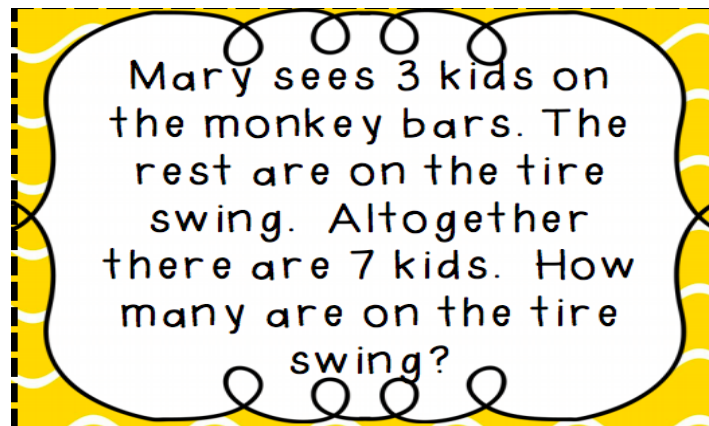


Day 29

Direction: Draw a picture of a house with a garden on a beautiful spring day. Use the shapes on the side to create your picture. Color your picture.

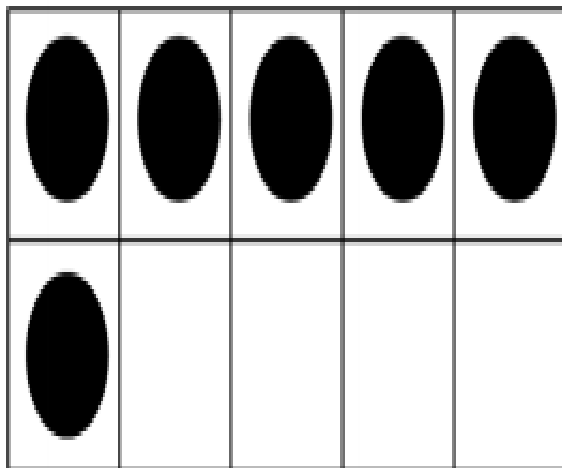


Day 29- Enrichment Task Cards

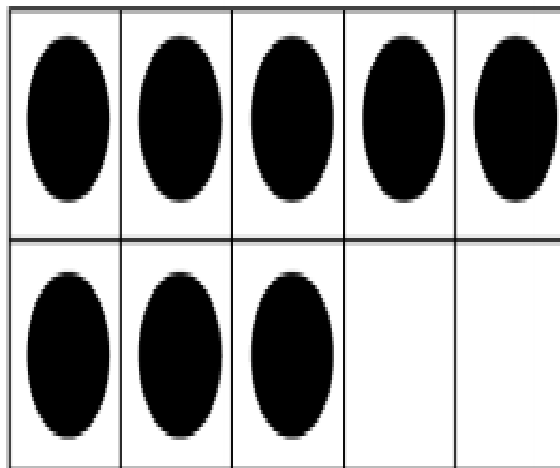


Day 30

Direction: Solve the equations.



$$6 + \boxed{} = 10$$



$$8 + \boxed{} = 10$$

Day 30- Enrichment Task Cards

7. What number will make 10?

10

4 ?



A. 6 C. 3

B. 9 D. 1

© Mrs. Richard 1st Resources 2015

Day 31

Direction: Count the number of apples. Cross out the amount being taken away. Write your answer.



Day 31- Enrichment Task Cards

